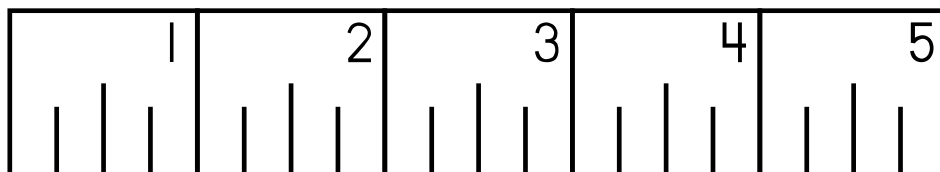



Measurement Task Cards

Measuring to the Nearest
Half Inch



This set of measurement task cards provides students an opportunity to practice measuring objects to the nearest inch and half inch. A little extra thinking is involved because some of the shoes do not line up with the edge of the ruler.

**Flip flops and zebra background from:
Maree Truelove**

<http://www.etsy.com/shop/MareeTruelove>

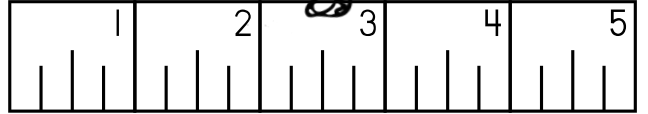

**Sneakers from:
KPM DOODles**

<http://www.etsy.com/shop/kpmdoodles>

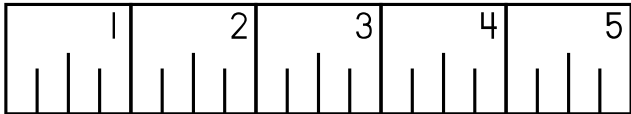

1



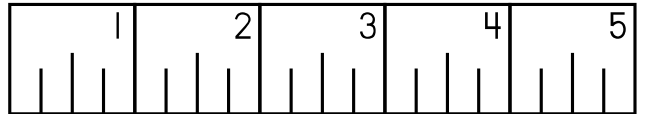
2



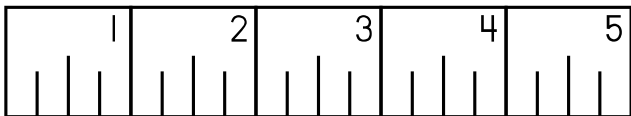

3




4



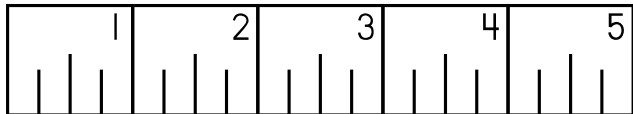
5



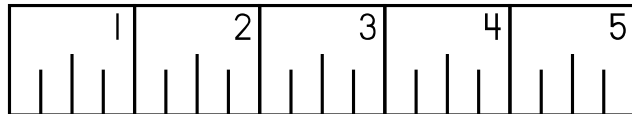
6




7



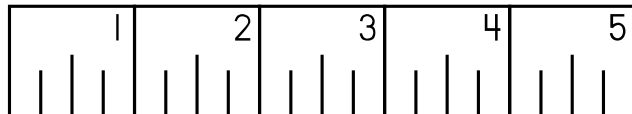

8




9



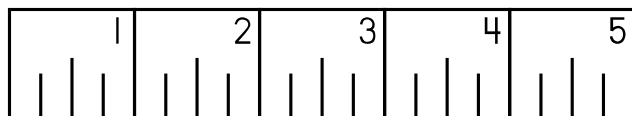
10



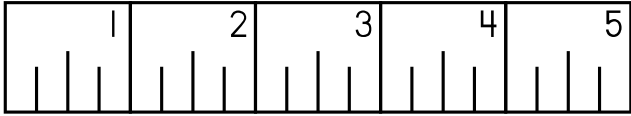
11



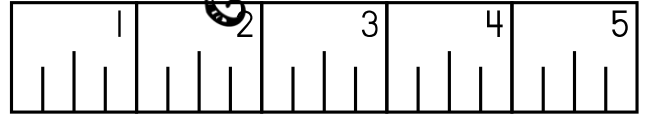

12



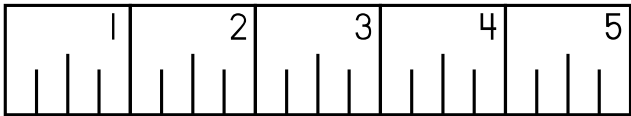
13



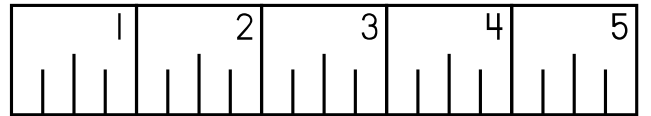
14



15



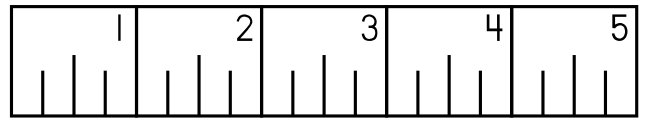

16




17



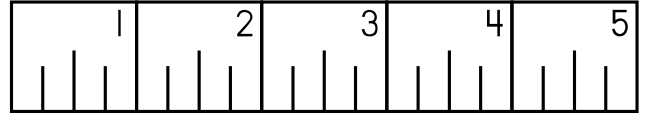
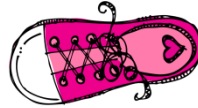
18



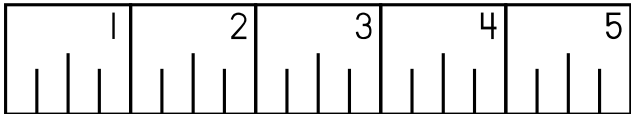
19



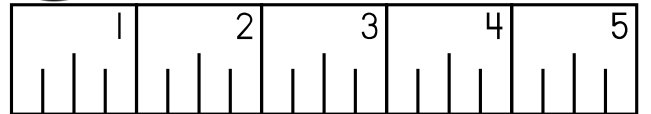
20



21



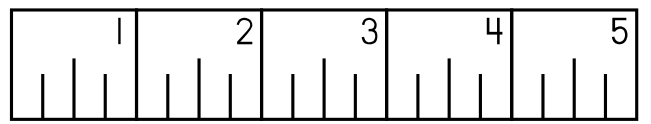

22



23




24



Name _____

Measuring to the Nearest Half Inch

Be sure to label your answers.



1. _____

13. _____

2. _____

14. _____

3. _____

15. _____

4. _____

16. _____

5. _____

17. _____

6. _____

18. _____

7. _____

19. _____

8. _____

20. _____

9. _____

21. _____

10. _____


22. _____

11. _____

23. _____

12. _____

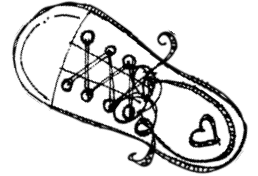
24. _____




Name _____

Measuring to the Nearest Half Inch

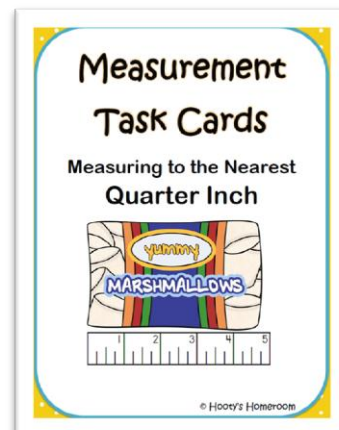
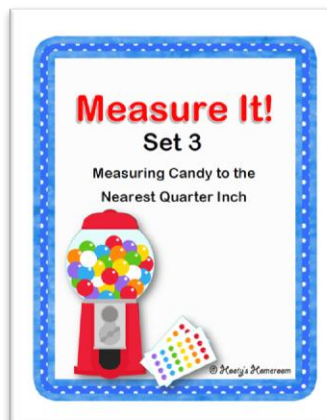
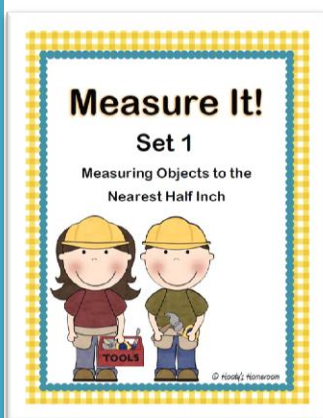
Be sure to label your answers.



- | | | | |
|-----|-------------------|-----|-------------------|
| 1. | <u>4 ½ inches</u> | 13. | <u>1 ½ inches</u> |
| 2. | <u>4 inches</u> | 14. | <u>3 ½ inches</u> |
| 3. | <u>4 inches</u> | 15. | <u>½ inches</u> |
| 4. | <u>1 ½ inches</u> | 16. | <u>2 ½ inches</u> |
| 5. | <u>3 ½ inches</u> | 17. | <u>2 ½ inches</u> |
| 6. | <u>3 ½ inches</u> | 18. | <u>4 ½ inches</u> |
| 7. | <u>2 ½ inches</u> | 19. | <u>3 ½ inches</u> |
| 8. | <u>2 inches</u> | 20. | <u>1 ½ inches</u> |
| 9. | <u>2 ½ inches</u> | 21. | <u>3 ½ inches</u> |
| 10. | <u>3 inches</u> | 22. | <u>1 ½ inches</u> |
| 11. | <u>4 ½ inches</u> | 23. | <u>2 ½ inches</u> |
| 12. | <u>2 ½ inches</u> | 24. | <u>3 inches</u> |



Please visit my [Teachers Pay Teachers](#) store for more measurement task cards and games.



Drop by and visit me at [Hooty's Homeroom](#).

